



11. Write these scales in the treble clef, ascending and descending. Use the correct key-signature for each, and mark the semitones with a slur.


a) F $\sharp$  minor melodic



b) C minor melodic



c) D minor melodic



d) E minor melodic

